


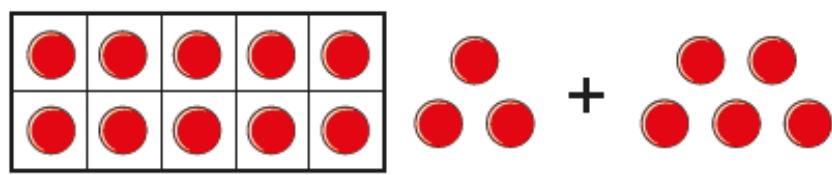
1 Complete the additions.

a)



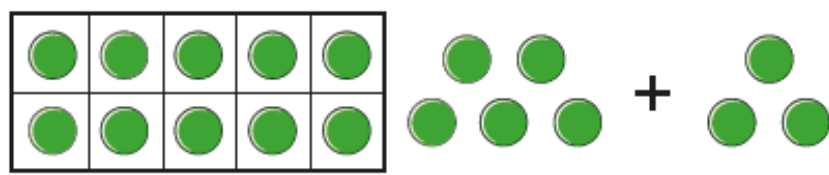
$3 + 5 = \square$

b)



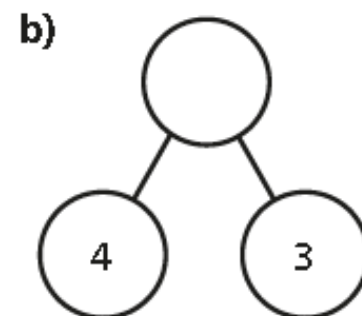
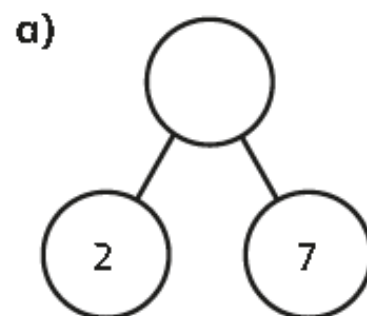
$13 + 5 = \square$

c)



$15 + 3 = \square$

2 Complete the part-whole models.



3 Complete the additions.

a) $12 + 7 = \square$

b) $13 + 4 = \square$

$17 + 2 = \square$

$14 + 3 = \square$

$7 + 12 = \square$

$4 + 13 = \square$

$2 + 17 = \square$

$3 + 14 = \square$

4 Tick the additions that make 16

$14 + 2$

$15 + 2$

$10 + 6$

$1 + 16$

$3 + 13$

$12 + 5$

$11 + 5$

$1 + 15$

5 Complete the additions.

$\square + 5 = 9$

$\square + 2 = 9$

$8 + \square = 9$

$6 + \square = 9$

6 Complete the additions.

$\square + 5 = 19$

$\square + 2 = 19$

$18 + \square = 19$

$16 + \square = 19$