

# Homework Week 3

## 17.9.21

Please complete your word check and read your books.

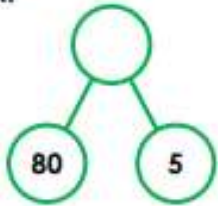
Please continue to practise your spellings.

This week we have been looking at 10s and 1s and partitioning.

Have ago at the questions below.

4. Complete the representations and number sentences below.


A.



$$\square + \square = \square$$

B.

$$\square + \square = \square$$



C.



$$\square + \square = \square$$



5. Use the number cards to complete the number sentences.

A.  $30 + 9 = \square$

B.  $25 + 5 = \square$

C.  $56 + \square = 56$

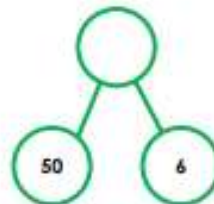
D.  $\square + 3 = 43$



6. Jake has represented a number in different ways.

A.  $60 + 5$

B.



C.  $45 + 20$

D.

$$35 + 30$$

Which is the odd one out? Explain your choice.



