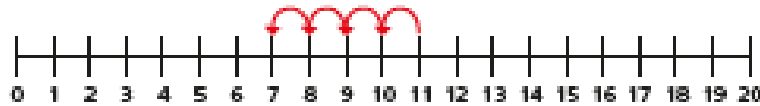
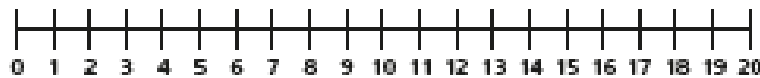


3 Use the number lines to help you.

a) $11 - 4 = \square$



b) $16 - 9 = \square$



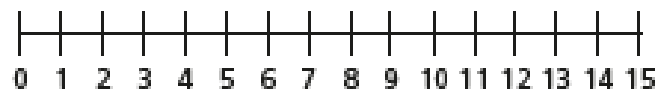
c) $14 - 11 = \square$



4 There are 13 toys in a box.
Kim takes some toys out of the box.
There are 5 toys left in the box.



How many toys does Kim take out of the box?



Kim takes \square toys out of the box.

1 Jack has 11 apples.

Mo has 5 apples.

Jack \square 11

Mo \square 5

How many more apples does Jack have than Mo?

Tick the number sentence that answers the question.

$11 + 5 = 16$

$11 - 5 = 6$

2 Eva has 13 sweets.

Teddy has 6 sweets.

How many more sweets does Eva have than Teddy?

$\square - \square = \square$

Eva has \square more sweets than Teddy.

1 Rosie has 15 cakes.



Her friends eat 6 cakes.

How many cakes does Rosie have left?

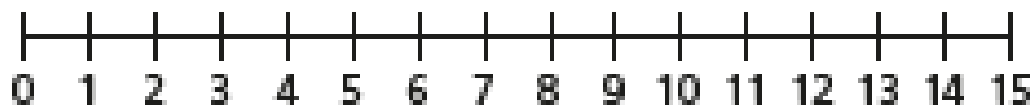
$$\square - \square = \square$$

Rosie has cakes left.

2 Jack has 13 stickers.

He gives 7 stickers to Dora.

How many stickers does Jack have left?



$$\square - \square = \square$$

Jack has stickers left.