

# Homework Week 4

## 24.9.21

Please complete your word check and read your books.


Please continue to practise your spellings.

This week we have been looking at counting in 2s, 5s and 10s.

Please have a go at the questions below.

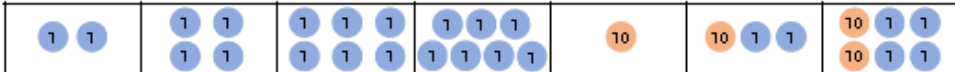
### Count in 2s, 5s and 10s

1. Which sequence is incorrect?








A. 

B. 

50	45	40	35	30	25	20
----	----	----	----	----	----	----

C. 

2. Which number will fit in every sequence?

					
15			30		40
30	25		15	10	5

A. 20

B. 35

C. 10

3. Jed is thinking of a sequence.



I start at 6 and end at 22. All of my numbers are even.

What is his sequence counting in?

6								22
---	--	--	--	--	--	--	--	----

