

Friday 15th January 2021


WALT: I can make equal groups by grouping.



There are ____ pieces of fruit altogether.

There is 1 piece of fruit in each group.


There are ____ groups.



There are ____ pieces of fruit altogether.

There are 2 pieces of fruit in each group.


There are ____ groups.



There are ____ pieces of fruit altogether.

There are 3 pieces of fruit in each group.


There are ____ groups.



There are ____ pieces of fruit altogether.

There are 2 pieces of fruit in each group.


There are ____ groups.



There are ____ pieces of fruit altogether.

There are 3 pieces of fruit in each group.

There are ____ groups.



There are ____ pieces of fruit altogether.

There are 3 pieces of fruit in each group.

There are ____ groups.