

WALT

I can share equally.



GET READY



True or False

$$30 + 6 + 4 = 50 - 20$$

True or False


$$30 + 6 + 4 = 50 - 20$$

False

LET'S LEARN




2 volunteers please



There are 4 equal groups of 5

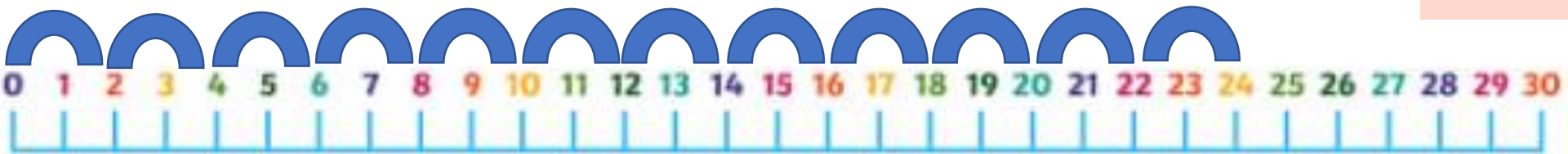
Put these chairs in to groups of 5.
20 chairs can be put into 4 groups of 5.
How many groups will you have?

Eva is putting 24 pencils into pots.



Eva needs
12 pots.

There are 12 equal groups of 2.
She puts 2 pencils into each pot.
How many pots does Eva need?



Activity

Following the instructions on each white board, put the cubes in to groups. How many groups do you have?




Activity

Drawing circles around the pictures, share the items in to the correct groups completing the stem sentences.

Friday 15th January 2021

WALT: I can make equal groups by grouping.

|



There are ____ pieces of fruit altogether.

There is 1 piece of fruit in each group.

There are _____ groups.

Extension

Using the cubes, how many different groupings can you make using 20 cubes?

Do they all work?
Why / Why not?



Plenary

Do you know what the symbol below means?

