

Homework Week 6

8.10.21

Please complete your word check and read your books.

Please continue to practise your spellings.

This week we have been looking at number bonds to 100 and related facts

Can you complete the activities below?

4. Draw the missing Numicon piece and fill in the missing numbers.

$$\begin{array}{c} \text{○} \\ \text{○} \\ \text{○} \\ \text{○} \\ \text{○} \end{array} + \square = 10 \quad \square + \begin{array}{c} \text{○} \\ \text{○} \\ \text{○} \\ \text{○} \end{array} = 9$$

A. $7 + \square = 10$

C. $\square + 5 = 9$

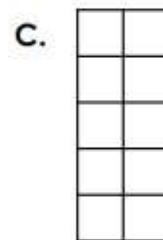
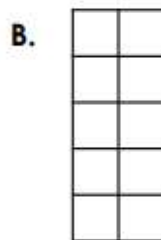
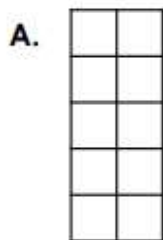
B. $70 + \square = 100$

D. $\square + 50 = \square$



VF
HW/Ex1

5. Using two colours, shade the frames to match the number sequence.



fifty = twenty + thirty

sixty = twenty + forty

seventy = twenty + fifty

2. Complete A. Use your answers to complete B.

A. $3 + 4 = \square$

B. $30 + 40 = \square$

$8 - 5 = \square$

$80 - 50 = \square$

$6 + 2 = \square$

$60 + 20 = \square$

$9 - 5 = \square$

$90 - 50 = \square$

$6 - 4 = \square$

$60 - 40 = \square$