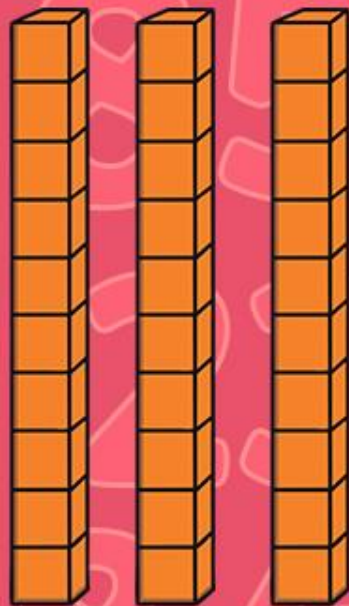


Steps of Ten



Carry on Counting



Can you count from the star number?

Can you count forward in 2s?

Can you count
forward in 5s?



Can you count
backward in 5s?

Can you count backward in 2s?

Carry on Counting



Can you count from the star number?

Can you count
forward in 5s?

25

Can you count
backward in 5s?

Carry on Counting



Can you count from the star number?

Can you count forward in 2s?

Can you count
forward in 5s?



Can you count
backward in 5s?

Can you count backward in 2s?

Carry on Counting



Can you count from the star number?

Can you count forward in 2s?

Can you count
forward in 5s?



Can you count
backward in 5s?

Can you count backward in 2s?

Carry on Counting



Can you count from the star number?

Can you count on and back in 2s from this number? What do you think?
Give a reason for your answer.

15

Towers of Ten



Count the blocks.



Towers of Ten



How did you count the blocks?

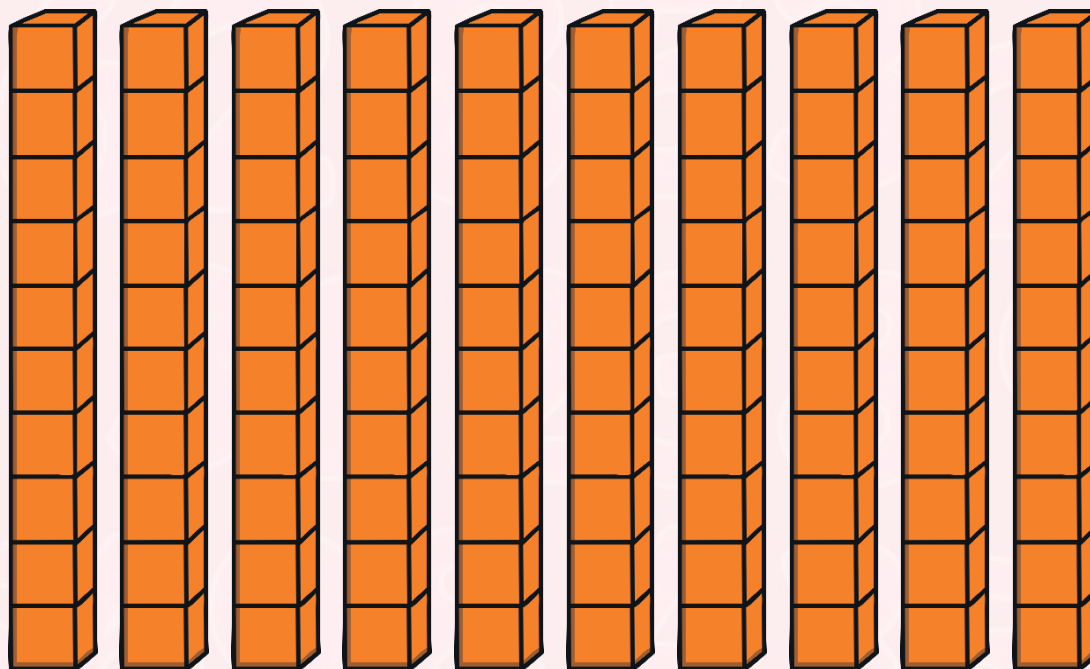


How else could we count the blocks?

Towers of Ten



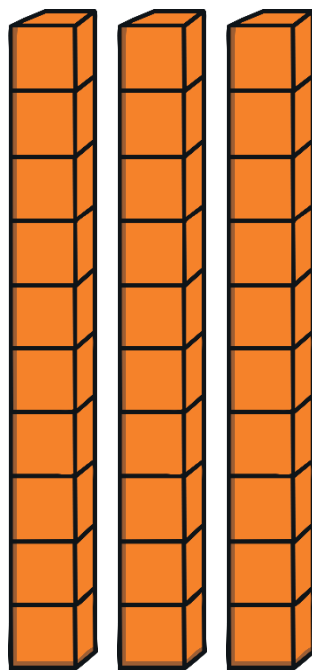
We can count to large numbers much faster if we count in steps of 10.



Towers of Ten



Can you count in 10s?

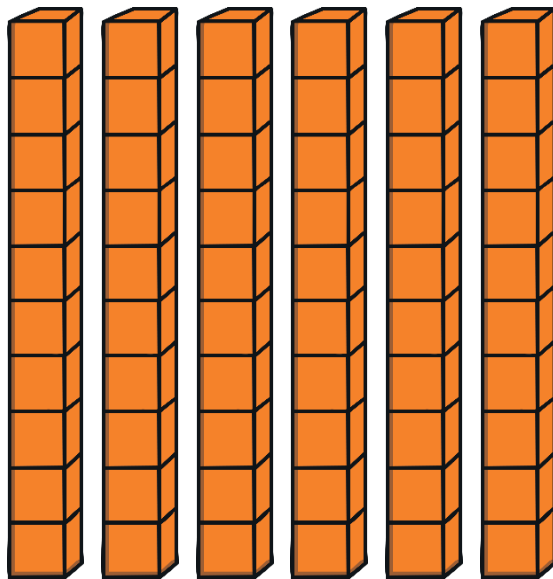


Count the blocks.

Towers of Ten



Can you count in 10s?

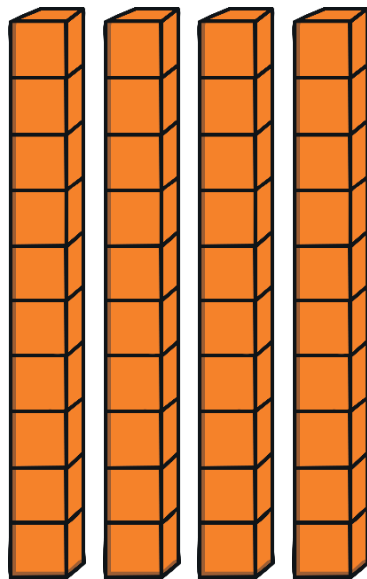


Count the blocks.

Towers of Ten



Can you count in 10s?

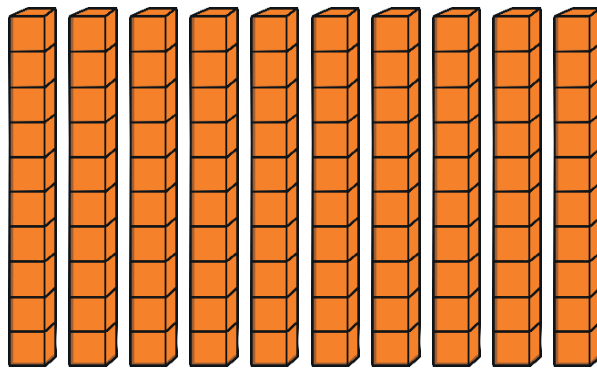


Count the blocks.

Towers of Ten



Can you count in 10s?




Count the blocks.

Towers of Ten



Can you count in 10s?



Count the blocks.

Counting in Tens



Can you see what happens when we count in tens?

Can you explain the pattern?

1	2	3	4	5	6	7	8	9	10
11	12	13	14	15	16	17	18	19	20
21	22	23	24	25	26	27	28	29	30
31	32	33	34	35	36	37	38	39	40
41	42	43	44	45	46	47	48	49	50
51	52	53	54	55	56	57	58	59	60
61	62	63	64	65	66	67	68	69	70
71	72	73	74	75	76	77	78	79	80
81	82	83	84	85	86	87	88	89	90
91	92	93	94	95	96	97	98	99	100

Missing Numbers



What is my missing number?

10

20

30

40

50

How do you know?

Missing Numbers



What is my missing number?

60

70

40

90

100

How do you know?

Missing Numbers



What is my missing number?

40

30

20

10

0

How do you know?

Missing Numbers Activity



Missing Numbers

I can count in steps of 10.

Can you find the missing numbers?

0		30		50
---	--	----	--	----

50			90	
----	--	--	----	--

20	50		70	80	100	
	40	60				
		70	90	60		120
50						
			110		60	
	0			30		90

Can you complete this in two different ways?

50					
----	--	--	--	--	--

50					
----	--	--	--	--	--



Missing Numbers

I can count in steps of 10.

Can you find the missing numbers?

	10		30		50
--	----	--	----	--	----

50				100
----	--	--	--	-----

20	30		50
30			
	50		
		80	20
60		90	10
	80		

100	90			60	
-----	----	--	--	----	--

60	50				
----	----	--	--	--	--

Missing Numbers

I can count in steps of 10.

Can you find the missing numbers?

0	10		30		50
---	----	--	----	--	----

50		80		100
----	--	----	--	-----

20		50	50
	40		40
40	50	70	
		80	20
60	70		
70		100	0

100		80		60	
-----	--	----	--	----	--

60		40			10
----	--	----	--	--	----