



Jumping in Twos

I can count in steps of 2.



Fill in the missing numbers by counting in steps of 2.



2



4

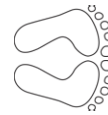


6



8









8



10



12



14









16



18



20



22









22



24

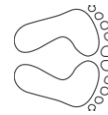


26



28









16



18





22





26







24





28





32





Answers



2



4



6



8



10



12



14



8



10



12



14



16



18



20



16



18



20



22



24



26



28



22



24



26



28



30



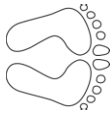
32



34



16



18



20



22



24



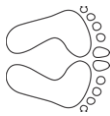
26



28



22



24



26



28



30



32



34



Jumping in Twos

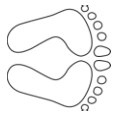
I can count in steps of 2.



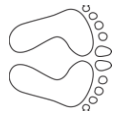
Fill in the missing numbers by counting in steps of 2.



2



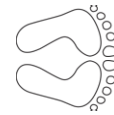
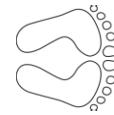
4



6



8





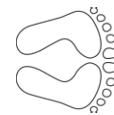
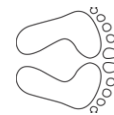
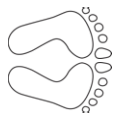
18



20

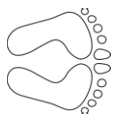


22





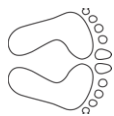
24



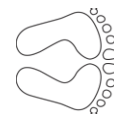
26



28



30

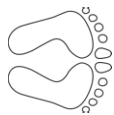




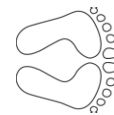
10

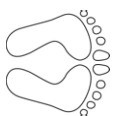


14



20

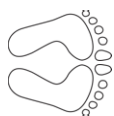




26



28



32

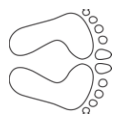


38

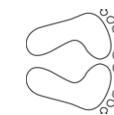




34



36



42





Answers



2



4



6



8



10



12



14



18



20



22



24



26



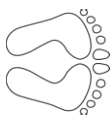
28



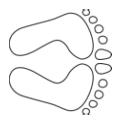
30



24



26



28



30



32



34



36



10



12



14



16



18



20



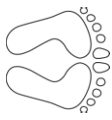
22



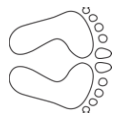
24



26



28



30



32



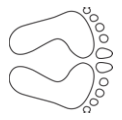
34



36



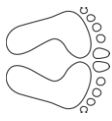
38



40



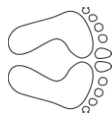
32



34



36



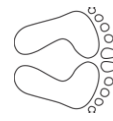
38



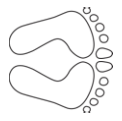
40



42



44



46



Jumping in Twos

I can count in steps of 2.



Fill in the missing numbers by counting in steps of 2.

2	4		8		12	
---	---	--	---	--	----	--

14	16			22	24	
----	----	--	--	----	----	--

	22			28		32
--	----	--	--	----	--	----

34			40	42		
----	--	--	----	----	--	--

	44		48			54
--	----	--	----	--	--	----

Can you find these missing numbers by counting backwards in 2s?

20		16		12		8
----	--	----	--	----	--	---

	24			18		
--	----	--	--	----	--	--

	30			24		
--	----	--	--	----	--	--



Answers

Fill in the missing numbers by counting in steps of 2.

2	4	6	8	10	12	14
---	---	---	---	----	----	----

14	16	18	20	22	24	26
----	----	----	----	----	----	----

20	22	24	26	28	30	32
----	----	----	----	----	----	----

34	36	38	40	42	44	46
----	----	----	----	----	----	----

42	44	46	48	50	52	54
----	----	----	----	----	----	----

Can you find these missing numbers by counting backwards in 2s?

20	18	16	14	12	10	8
----	----	----	----	----	----	---

26	24	22	20	18	16	14
----	----	----	----	----	----	----

32	30	28	26	24	22	20
----	----	----	----	----	----	----