



Guster sleeps for 2 times as many hours a day as Miranda.

If Guster sleeps for 14 hours a day, how many hours does Miranda sleep for?

1



Miranda ate a quarter of her packet of sweets.

There were 16 sweets in the pack.

How many sweets has she eaten?



2



There are usually 6 workers at a time in the quarry.

Last week, there were four times as many workers.

How many were working?



3



Miranda discovered 55 jewels in a cave.


She divided them between herself and four friends.

How many did each receive?



4




What is the  worth in the multiplication below?

$$6 \times \text{} = 42$$

5



What is the  worth in the division below?

$$28 \div \text{} = 4$$

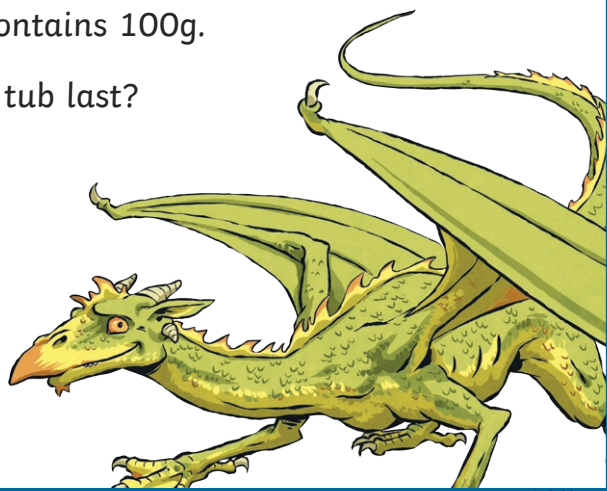
6



Gran uses 10g of baking powder to bake a lemon drizzle cake every day.

A tub of baking powder contains 100g.

How many days does the tub last?



7



Miranda slices up a pizza to share with Guster.

She cuts it into 22 slices.

How many slices do they have each?



8



A dragon has two wings.

There are 9 dragons in Tangleclaw's colony; how many wings is this?

9



Each digger has 4 wheels.

There are 24 wheels.

How many diggers are there?



10



Miranda and Guster have a playdate four times a month.

How many playdates do they have over a year?



11



For Miranda's party, 5 boxes of balloons are purchased.

Each box contains 7 balloons.

How many balloons are purchased?



12



1 Guster eats three 3 times as much as Miranda.
If Guster eats 24 slices of lemon drizzle cake
in a month, how many does Miranda eat?

Miranda ate a quarter of her packet of sweets.
There were 32 sweets in the pack.
How many sweets has she eaten?



2

3 There are usually 8 workers at a time in the quarry.
Last week, there were seven times as many workers.
How many were working?




3

4 Miranda discovered 66 jewels in a cave.
She divided them between herself and five friends.
How many did each receive?




4

What is the  worth in the multiplication below?

$$7 \times \text{} = 63$$

5

What is the  worth in the division below?

$$48 \div \text{} = 4$$

6

Gran uses 20g of flour to bake a lemon drizzle cake every day.

A bag of flour contains 100g of flour.

How many days does the bag of flour last?



7

Miranda slices up a pizza to share with Guster and Redbreath.

She cuts it into 36 slices.

How many slices do they have each?




8



9

A dragon has two wings.
There are 12 dragons in Tangleclaw's colony; how many wings is this?

Each digger has 4 wheels.
There are 48 wheels.
How many diggers are there?



10

Miranda and Guster have a playdate three times a week.
How many playdates do they have over a year?



11

For Miranda's party, 7 boxes of sweets are purchased.
Each box contains 6 sweets. Miranda has 6 party bags to fill.
How many sweets will be in each party bag?



12



The average dragon has 46 teeth.
In a colony of 17 dragons, how many teeth are there altogether?

1

Miranda ate a quarter of her packet of sweets.
There were 48 sweets in the pack.
How many sweets has she eaten?



2

There are usually 8 workers at a time in the quarry.
Last week, there were 12 times as many workers.
How many were working?





3

Miranda discovered 121 jewels in a cave.
She divided them between herself and ten friends.
How many did each receive?



4

What is the  worth in the multiplication below?

$$11 \text{  + 6598 = 6631$$

5

What is the  worth in the division below?

$$1879 \div \text{} = 1.879$$

6

Gran uses 50g of flour to bake a lemon drizzle cake every day. A bag of flour contains 1.5kg of flour.


How many days does the bag of flour last?



7

Miranda slices up two pizzas to share with Guster, Redbreath and her gran. She cuts each pizza into 24 slices.

How many slices do they have each?




8



A dragon has two wings. In Tangleclaw's colony, there are 37 dragons in total.
How many wings are there altogether?

9

Each digger has 4 wheels and each truck has 6 wheels.
There are 27 diggers and 19 trucks.
How many wheels are there in total?



10

Miranda and Guster have a 156 playdates during a year.
How many a week does this equate to?



11

For Miranda's party, 9 boxes of sweets are purchased.
Each box contains 12 sweets. Miranda has 6 party bags to fill.
How many sweets will be in each party bag?



12