

Maths No problem Chapter 16

Monday – Workbook pages 101 – 104



Chapter
16

Time

Name: _____ Class: _____ Date: _____

Worksheet 1

Telling Time to the Hour

1 Match.



● 5 o'clock



● 11 o'clock



● 2 o'clock



● 12 o'clock



2 Write the time shown on each clock.

Example



1 o'clock

(a)



(b)



(c)



(d)



(e)



(f)



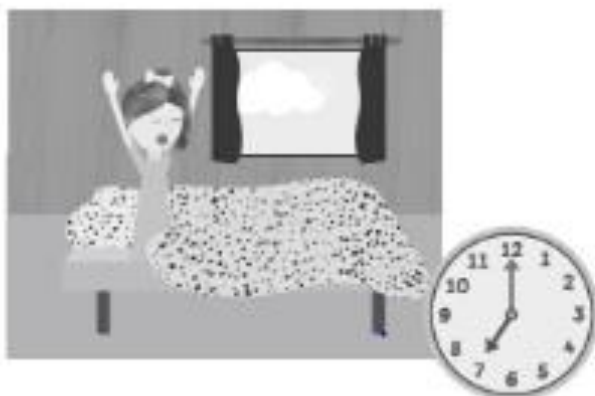
(g)





- 3 The pictures show what Holly does during the holidays.
Write the time shown on each clock.

(a)



Holly wakes up at in the morning.

(b)



Holly goes for a walk in the park at in the morning.



(c)



Holly plays with her friends at in the afternoon.

(d)



Holly watches television at in the evening.





Name: _____ Class: _____ Date: _____

Worksheet 2

Telling Time to the Half Hour

1 Match.



● half past 3



● half past 7



● half past 6



● half past 12





2 Write the time shown on each clock.

Example



half past 11

(a)



(b)



(c)



(d)



(e)



(f)




(g)





3 The pictures show what Sam does after school.

(a)



Sam boards the bus at in the afternoon.

(b)



Sam does his homework at in the afternoon.




(c)



Sam takes a shower at in the evening.

(d)



Sam brushes his teeth at at night.



Name: _____ Class: _____ Date: _____

Worksheet 3

Using Next, Before and After

This is what Elliott does on a Saturday.



wakes up




cleans room



plays football



goes on a family outing


- (a) What was Elliott doing at  ?
- (b) What did Elliott do after waking up ?
- (c) What did Elliott do before going on his family outing?
- (d) Elliott cleaned his room at . He next.



Name: _____ Class: _____ Date: _____

Worksheet 4

Estimating Duration of Time



Fill in the blanks with seconds, minutes, hours, days or weeks.


- (a) I sleep about 10 every day.
- (b) I take about 15 to take a shower.
- (c) I need about 3 to recover from flu.
- (d) The family cat runs up the stairs in 2 .
- (e) Summer holidays last for 6 .



Name: _____ Class: _____ Date: _____

Worksheet 5

Comparing Time



Compare using quicker, slower, earlier or later.

- (a) Sam came 1st in a race.

He is than everyone else.

- (b) Ruby came last in a race.

She is than everyone else.

- (c) Yesterday, Amira woke up at 8 o'clock.

Today, Amira woke up at half past 8.

Amira woke up today.

- (d) Hannah went to bed at 10 o'clock yesterday.

Today, Hannah went to bed at 9 o'clock.