

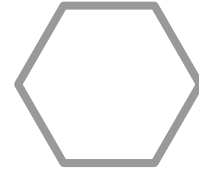


Name: \_\_\_\_\_ Class: \_\_\_\_\_

Match the description to the shape name.  
Then match the shape name to the shape.  
The first one has been done for you.

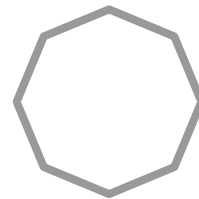
- 3 corners
- 3 sides

hexagon



- 5 corners
- 5 sides

octagon



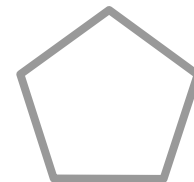
- 4 corners
- 4 equal length sides

pentagon



- 4 corners
- 4 sides opposite sides equal length

rectangle



- 6 corners
- 6 sides

square



- 8 corners
- 8 sides

triangle

