



Pattern Play 5

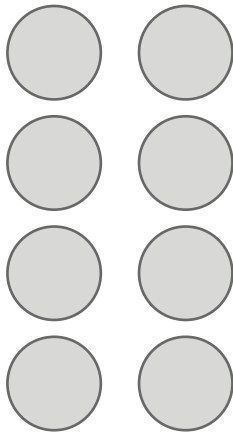
Activity Sheet

Name: _____

Class: _____

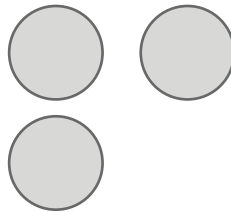
Look at the number of counters. Is it an odd or even number? Circle the correct answer.

1 **8**



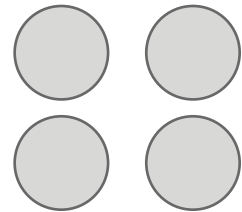
odd/even

2 **3**




odd/even

3 **4**



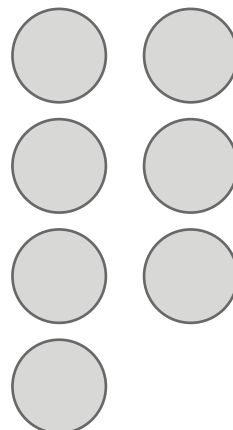
odd/even

4 **9**



odd/even

5 **7**



odd/even



Pattern Play 5

Activity Sheet

Name: _____

Class: _____

6 Draw an even number of counters.

7 Draw an odd number of counters.