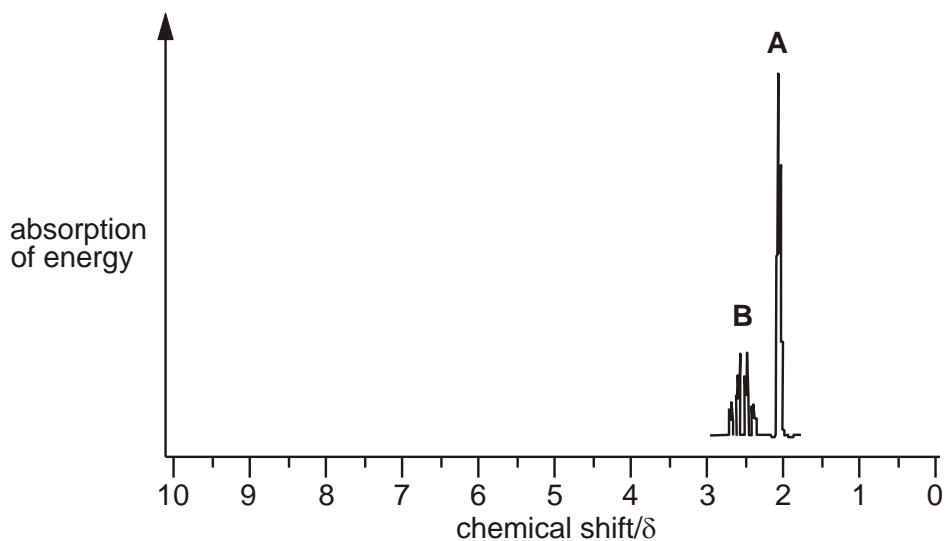


1. Unknown compounds are often identified by n.m.r. spectroscopy.

Part of the n.m.r. spectrum of **butanone** is shown on the axes below.



(i) State which part of the butanone molecule is responsible for peak **A** at $\delta = 2.1$.

Explain your reasoning.

.....
.....
.....
.....

[2]

(ii) Explain why peak **B** is split into a quartet.

.....
.....

[1]

(iii) Predict the remainder of the n.m.r. spectrum of butanone by sketching it on the axes above.

[2]

- (iv) Write the relative peak area above each of the peaks on the completed spectrum of butanone.

[1]

[Total 6 marks]

2. In this question, one mark is available for the quality of the use and organisation of scientific terms.

Describe and explain the different ways that a high resolution n.m.r. spectrum can give information about a molecule.

.....

.....

.....

.....

.....

.....

.....

.....

.....

.....

.....

.....

.....

.....

.....

.....

.....

.....

.....

.....

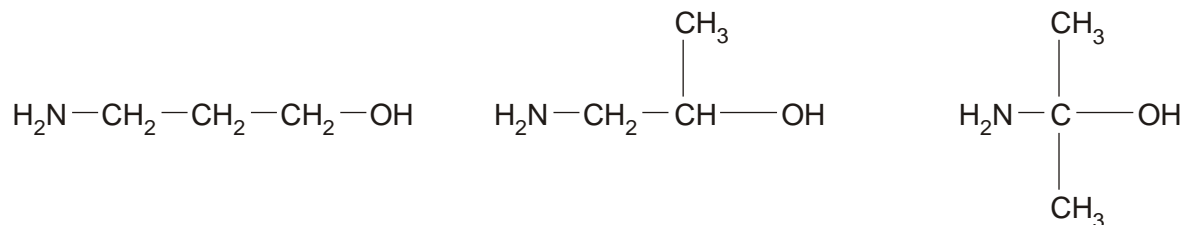
.....

.....

[7]
Quality of Written Communication [1]
[Total 8 marks]

3. In this question, one mark is available for the quality of use and organisation of scientific terms.

The structural formulae of three isomers of C_3H_9NO are shown below.



Describe the **similarities** and **differences** you would expect to see when comparing the

- infra-red spectrum of each isomer
- mass spectrum of each isomer.

.....

.....

.....

.....

.....

.....

.....

.....

.....

.....

.....

.....

.....

.....

.....

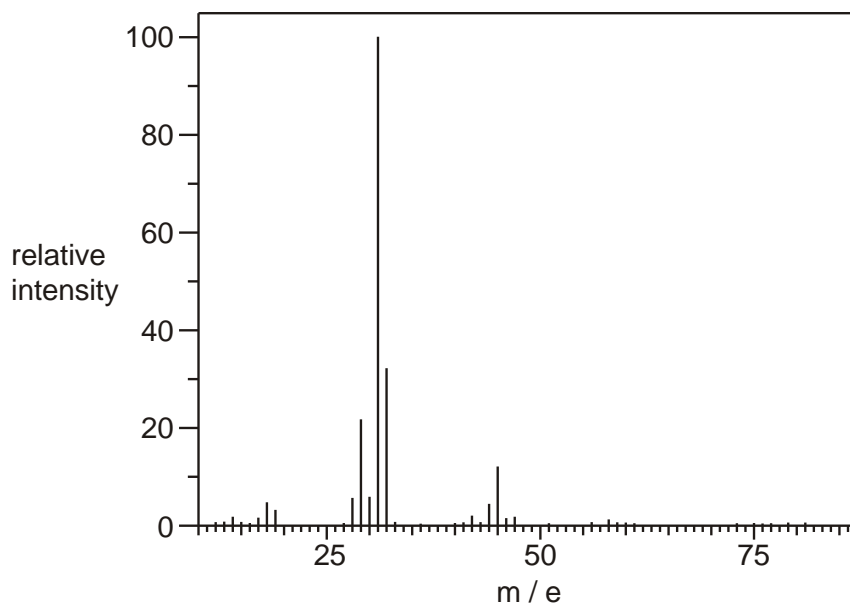
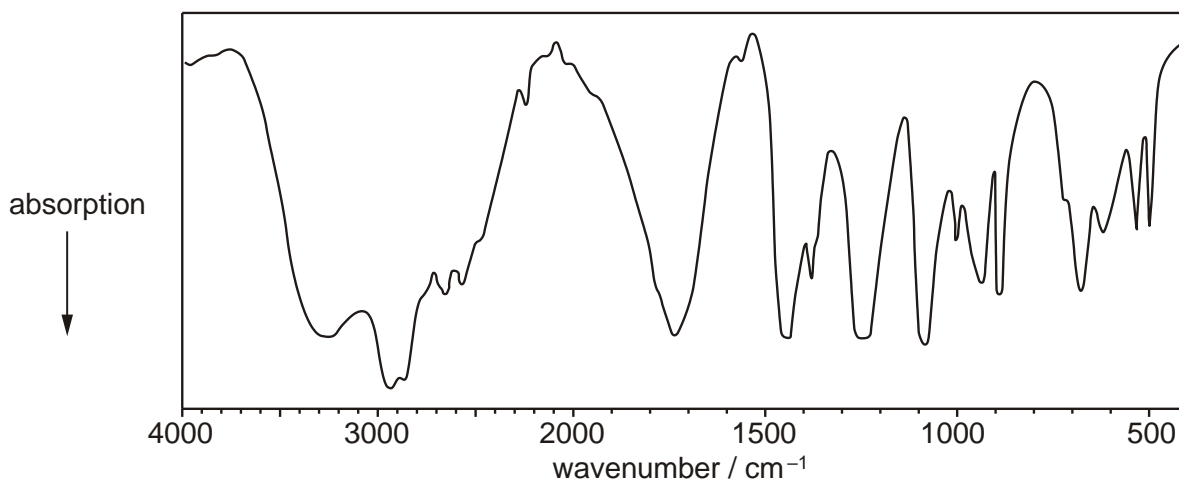
.....

[5]
Quality of Written Communication [1]
[Total 6 marks]

4. Compound **G** can be extracted from sugar-cane and is commonly used in 'rejuvenating' skin creams because it helps to remove some of the dead cells from the skin surface.

The molecular formula of **G** is $C_2O_3H_4$ and the compound contains **two different** functional groups containing oxygen atoms.

The infra-red and mass spectra of **G** are shown below.



(a) After inspection of the mass spectrum of **G**, an analyst wrote the comment:

'The molecular ion peak appears to be missing from the spectrum.
The base peak is due to a fragment ion with $m / e = 31$.'

(i) Explain what is meant by the following terms.

molecular ion peak

.....

base peak

.....

[2]

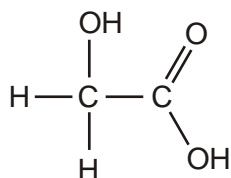
(ii) Suggest why the molecular ion peak is missing from the spectrum.

.....

.....

[1]

(b) The structure of compound **G** is shown below.



Show how the infra-red and mass spectra confirm this structure. In your answer, you should suggest a possible structure for the ion that gives the base peak at $m / e = 31$ in the mass spectrum.

.....

.....

.....

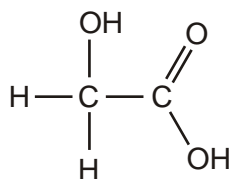
.....

.....

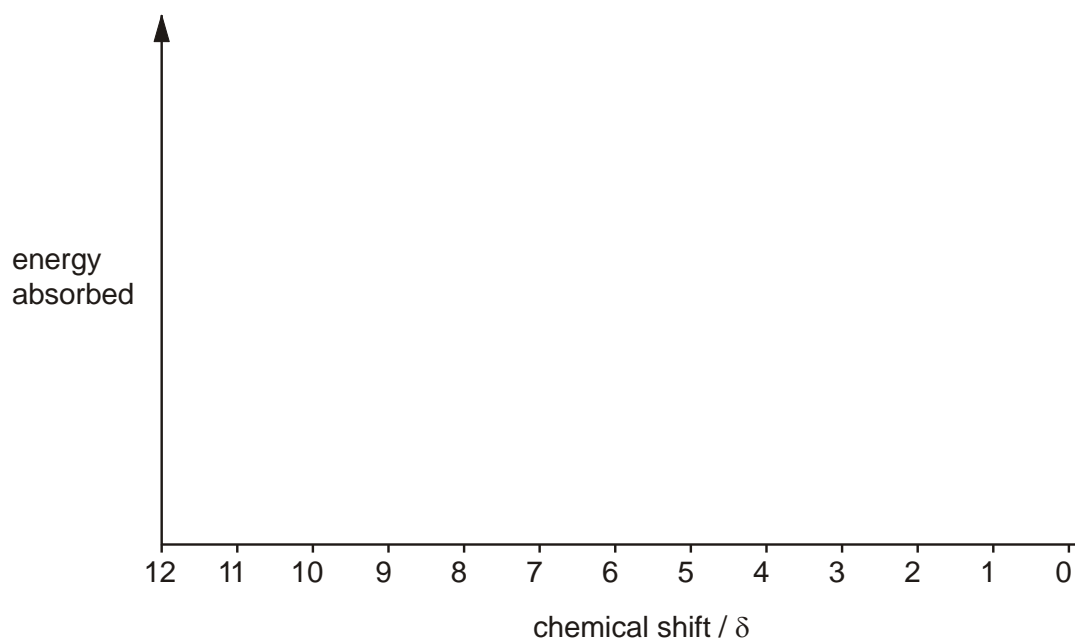
.....

[4]

(c) The structure of compound **G** is shown below.



Sketch the ^1H n.m.r. spectrum of compound **G** and label the relative peak areas. Label any peaks that would be lost from the spectrum on shaking with D_2O .



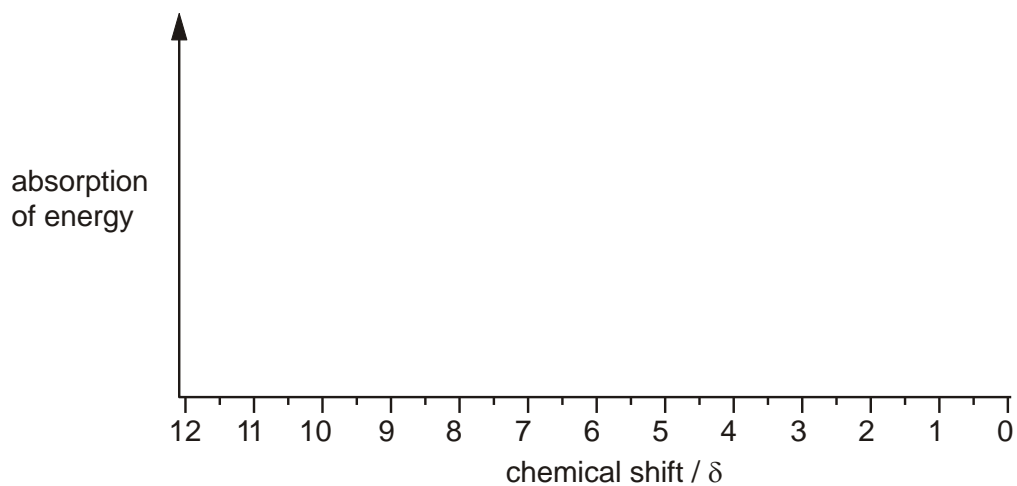
[4]

[Total 11 marks]

5. Lactic acid produces an n.m.r. spectrum in D_2O with peaks at chemical shift values of 1.4 ppm and 4.3 ppm.

(i) On the axes below, sketch the high resolution n.m.r. spectrum of lactic acid in D_2O .

Show any splitting patterns and state the relative areas of the two peaks.



[4]

(ii) How many peaks would you expect if the n.m.r. spectrum of lactic acid was run in an inert solvent rather than in D_2O ? Explain your answer.

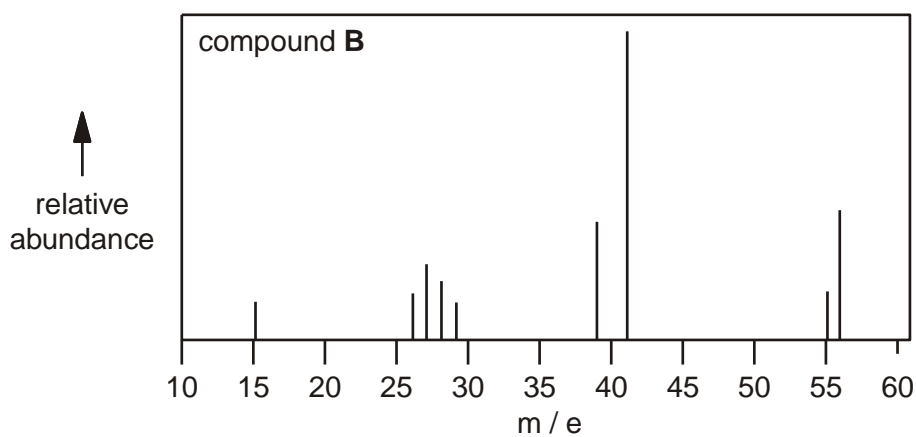
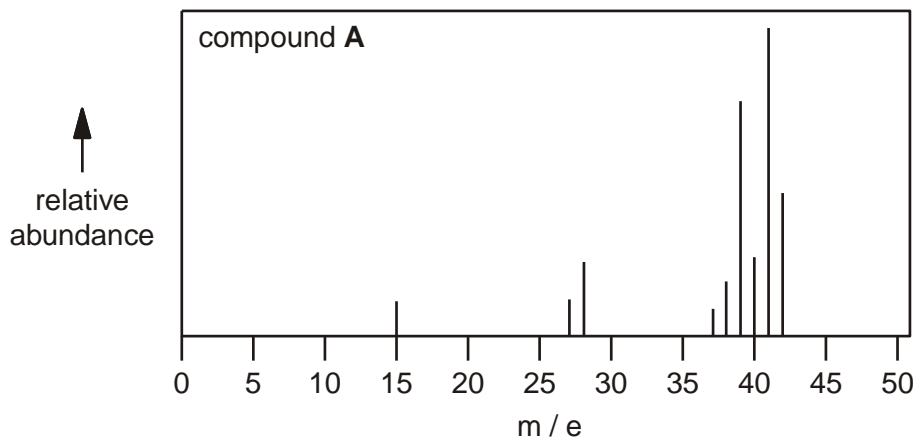
.....
.....

[2]

[Total 6 marks]

6. This question is about the use of spectrometry in helping to gain information about the structure of organic molecules.

The major peaks in the mass spectra of two hydrocarbons **A** and **B** are shown below. Compounds **A** and **B** have the same empirical formula.



- (i) Deduce the molecular formula of each compound.

Compound **A**

Compound **B**

(ii) Draw the structural formula of compound **A**.

[1]

(iii) Suggest the species responsible for the peak at m/e 41 in the spectrum of compound **B**.

.....

[2]

[Total 5 marks]

7. Forest fires release a large number of organic compounds into the atmosphere. These include alcohols and carboxylic acids. An environmental chemist is trying to identify one of these compounds in a sample of air.

The unknown compound **X** is thought to be a carboxylic acid with empirical formula $C_2H_3O_2$.

(a) Mass spectrometry is used to help deduce the molecular formula of compound **X**.

(i) Describe how the mass spectrum of compound **X** is used to determine its relative molecular mass.

.....

.....

[2]

- (ii) The relative molecular mass of compound **X** is shown to be 118.

Explain how this relative molecular mass and the empirical formula are used to deduce that the molecular formula of compound **X** is $C_4H_6O_4$. Show any working.

.....

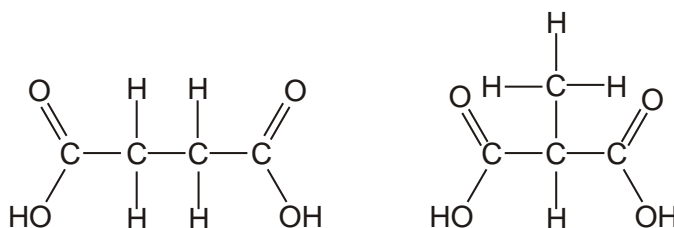
.....

.....

.....

[2]

- (b) The two dicarboxylic acids with molecular formula $C_4H_6O_4$ are shown below.



N.m.r. spectroscopy is used to deduce which of these is the unknown compound.

The environmental chemist obtains an n.m.r. spectrum of compound **X** and then adds some D_2O and obtains a second n.m.r. spectrum.

- (i) What difference would you expect between these two n.m.r. spectra?

.....

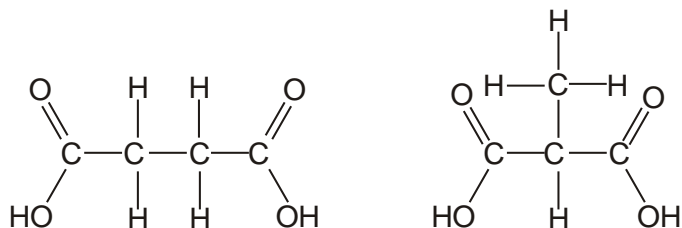
.....

[1]

- (ii) Predict the number of peaks and any spin-spin splitting expected on the n.m.r. spectrum of a solution in D_2O of the other acid with formula $C_4H_6O_4$.

Explain your reasoning.

(The two possible structures of compound **X** are shown again below.)



.....

.....

.....

.....

.....

.....

.....

.....

.....

.....

[3]

[Total: 8 marks]